



Order of Operations

1 Find the answers to these calculations.

$24 \div 6 + 2$




$12 \times 5 - 3$




2 marks

2 Calculate:

$70 + (3 \times 4)$




$35 - (50 \div 2)$




2 marks

3 Work out:

$6 \times (18 - 15)$



$(54 + 27) \div 9$



2 marks

4 Work out the answers to these calculations.

$48 - 32 \div 8$



$70 + 10 \times 7$



2 marks


Order of Operations

5 Work out:

$90 - 9^2$




7×2^3



2 marks

$2^2 + 3^2$



$8^2 - 1^3$




2 marks

6 Calculate:

$7^2 + 8 \times 6$



$3^3 - 18 \div 9$



2 marks

7 Work out the answers to the calculations below.

$(5 + 3)^2 \div 16$



$5^3 \times (4 - 1)$



2 marks

"I know the order to do things in a calculation."

